

Image Subtraction

Name: _____

Date: _____

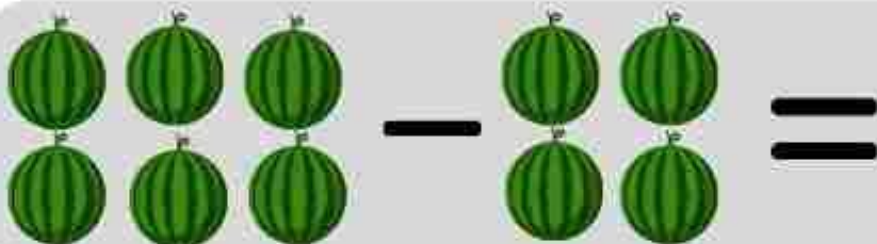




Image Subtraction

Name: _____

Date: _____



Name :


Class :

Subtract and Match

Match groups of fruits that have the same number!



-3 •



-2




-1 •



-4




-1 •



-1



-3 •




-0

Name: _____

Date: _____


FRUIT SUBTRACTION

Solve the subtraction equations below.




A subtraction problem using blueberries. On the left, there are 6 blueberries arranged in two rows of three. A minus sign is in the middle. On the right, there are 4 blueberries arranged in two rows of two. An equals sign follows, and then a dotted line for the answer.

$$6 - 4 = \dots\dots\dots$$



A subtraction problem using pineapples. On the left, there are 8 pineapples arranged in two rows of four. A minus sign is in the middle. On the right, there are 6 pineapples arranged in two rows of three. An equals sign follows, and then a dotted line for the answer.

$$8 - 6 = \dots\dots\dots$$




A subtraction problem using red apples. On the left, there are 9 apples arranged in three rows of three. A minus sign is in the middle. On the right, there are 3 apples in a single row. An equals sign follows, and then a dotted line for the answer.

$$9 - 3 = \dots\dots\dots$$



A subtraction problem using green pears. On the left, there are 8 pears arranged in two rows of four. A minus sign is in the middle. On the right, there are 4 pears arranged in two rows of two. An equals sign follows, and then a dotted line for the answer.

$$8 - 4 = \dots\dots\dots$$



A subtraction problem using red strawberries. On the left, there are 5 strawberries arranged in two rows: the top row has three and the bottom row has two. A minus sign is in the middle. On the right, there is 1 strawberry. An equals sign follows, and then a dotted line for the answer.

$$5 - 1 = \dots\dots\dots$$

Name: _____

Date: _____

FRUIT SUBTRACTION

Solve the subtraction equations below.

$$5 - 4 = \dots\dots\dots$$

$$7 - 5 = \dots\dots\dots$$

$$5 - 1 = \dots\dots\dots$$

$$9 - 6 = \dots\dots\dots$$

$$8 - 3 = \dots\dots\dots$$

Subtraction Word Problems

Name : _____

Date : _____

I have 3 🍏 apples, I give 2 apples to my friend, how much 🍏 do I have now?



I planted 10 🌳 trees and 5 got destroyed. How many 🌳 are there now?



There were 10 🐭 mice. 2 🐭 mice were eaten by snakes. How many 🐭 are there now?



I have 5 🥕 carrots, two got lost. How many 🥕 are there with me?



Subtraction


Word Problems



Name : _____


Date : _____

Grade 1

I had 6  pencils. 2 were broken. How much  do I own now?





I planted 3  trees. One was destroyed by Elephants. How much  do I have now?



There were 10 milk  packets in the fridge. 3 of them were spoilt. How many packets  can we drink?



There are 10  bulbs in the house. 5 of them are fused. How many  are working?